

Conta e collega al numero giusto



7



9



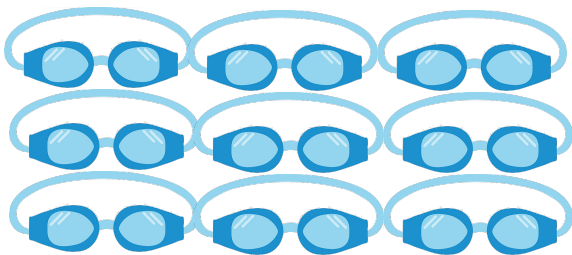
8



1



4



5

Conta e collega al numero giusto




5



6



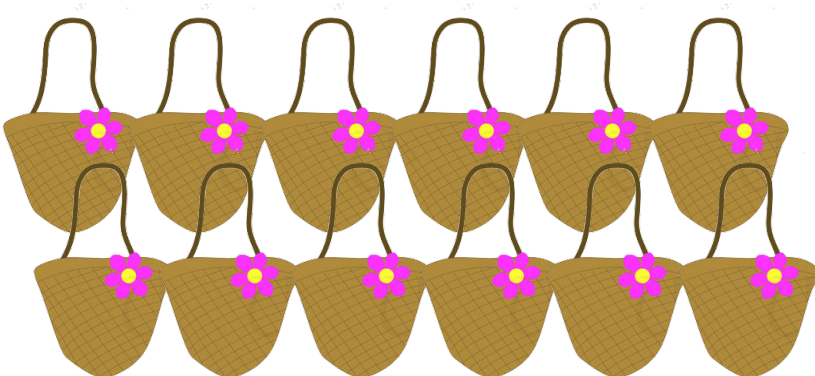
12



7

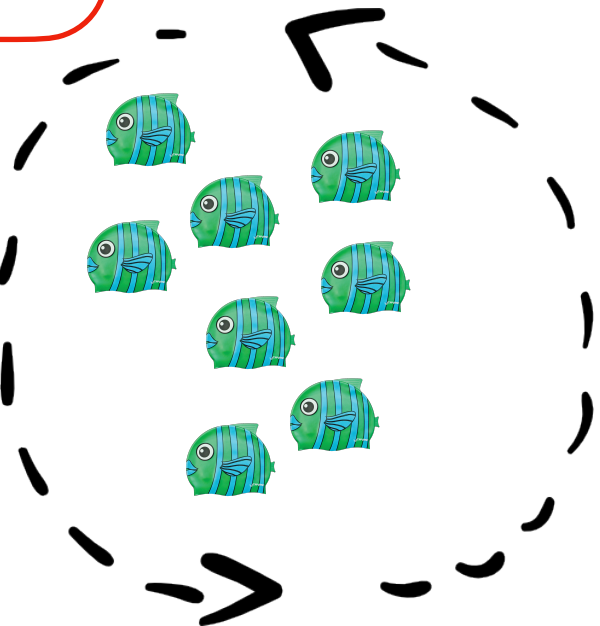
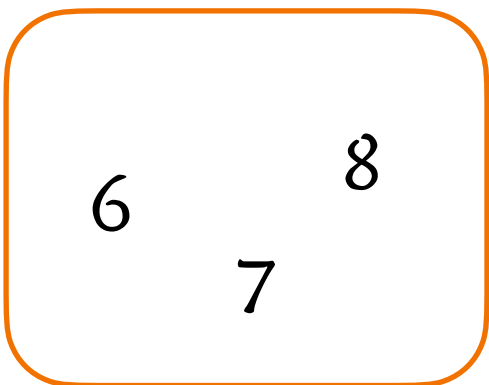
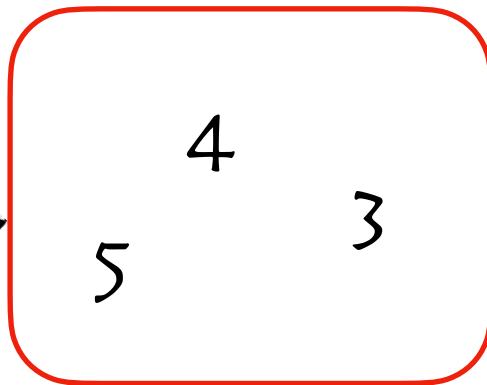


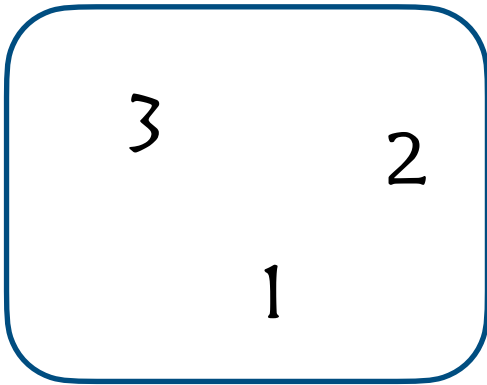
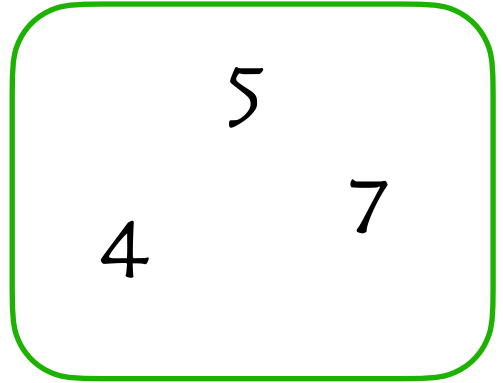



4


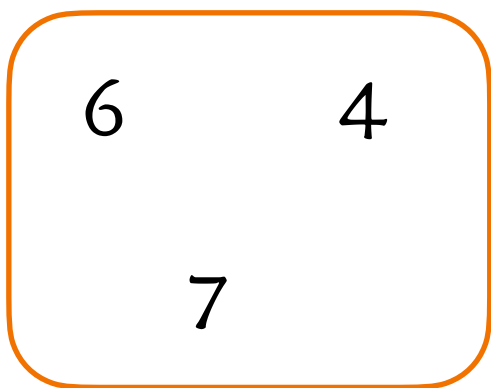
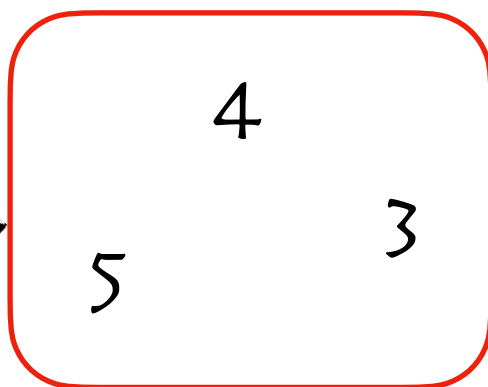

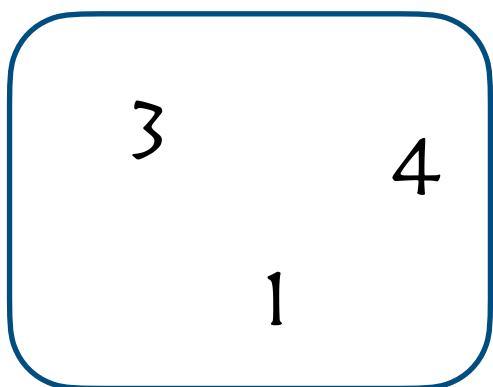
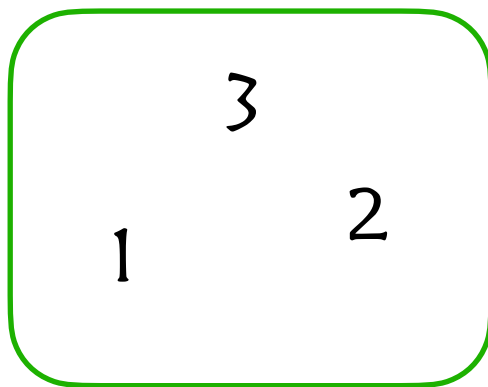



3

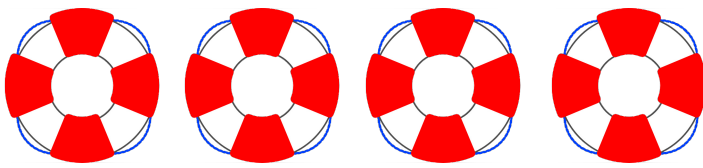

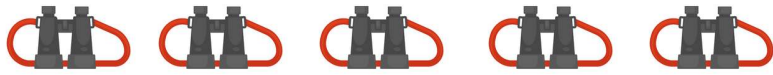
Conta e sbarra il numero giusto



Conta e sbarra il numero giusto



Conta e scrivi il numero nella casella



Conta e scrivi il numero giusto in ogni riquadro



A rectangular box containing two circles and a dashed square. The top-left circle contains one yellow swim cap with the word 'BANANA' on it. The top-right circle contains three yellow swim caps with 'BANANA' on them. The bottom-left circle contains one yellow swim cap with 'BANANA' on it. The bottom-right area is a dashed square for writing the answer.

A rectangular box containing two circles and a dashed square. The top-left circle contains one pair of blue goggles. The top-right circle contains five pairs of goggles: two blue and three green. The bottom-left circle contains three pairs of blue goggles. The bottom-right area is a dashed square for writing the answer.

A rectangular box containing two circles and a dashed square. The top-left circle contains one pair of blue goggles. The top-right circle contains four pairs of blue goggles. The bottom-left circle contains one pair of blue goggles. The bottom-right area is a dashed square for writing the answer.

A rectangular box containing two circles and a dashed square. The top-left circle contains one pair of blue goggles. The top-right circle contains four pairs of goggles: two blue and two green. The bottom-left circle contains three pairs of blue goggles. The bottom-right area is a dashed square for writing the answer.

A rectangular box containing two circles and a dashed square. The top-left circle contains one green fish. The top-right circle contains one green fish. The bottom-left circle contains three green fish. The bottom-right area is a dashed square for writing the answer.

Conta e scrivi il numero giusto in ogni riquadro



Counting exercise for inflatable rings. The first row shows 1 ring in a small circle and 5 rings in a large circle. The second row shows 2 rings in a small circle and a dashed box for the answer.

Counting exercise for yellow towels. The first row shows 1 towel in a small circle and 4 towels in a large circle. The second row shows 1 towel in a small circle and a dashed box for the answer.


Counting exercise for red flip-flops. The first row shows 1 flip-flop in a small circle and 3 flip-flops in a large circle. The second row shows 2 flip-flops in a small circle and a dashed box for the answer.

Counting exercise for brown baskets with pink flowers. The first row shows 1 basket in a small circle and 4 baskets in a large circle. The second row shows 2 baskets in a small circle and a dashed box for the answer.


Counting exercise for pink flip-flops. The first row shows 1 flip-flop in a small circle and 1 flip-flop in a large circle. The second row shows 1 flip-flop in a small circle and a dashed box for the answer.



Cerchia il numero indicato nella casella



4



3



7



3





Cerchia il numero indicato nella casella



4

5

8

2



Conta e scrivi il numero nella casella giusta

